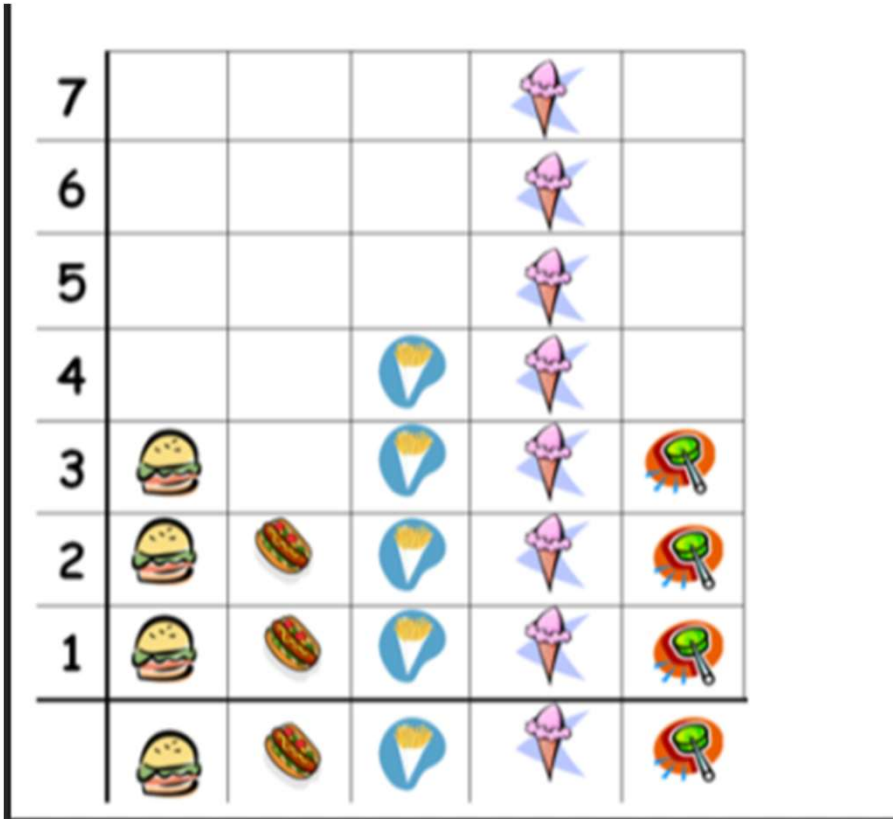


Wednesday Lesson



How many people liked ice cream best?

How many people liked burgers best?

How many people liked hot dogs best?






Which was the most favourite food? How can you tell?


Which was the least favourite food? How do you know?

How many more people liked burgers than hot dogs?

How many more people liked ice cream than popcorn?

How many less hot dogs are there than ice creams?

Red	
Blue	
Green	
Pink	
Yellow	

Key		= 2 children
-----	---	--------------

How many children does one blob represent? How can we find this out?










How many children liked red best?

How many children liked green best?

Which other colour had the same number of children like it as red?

How many more children liked green than blue?

How many children liked pink less than blue?

Colour	Number of Smarties
Green	
Orange	
Blue	
Pink	
Yellow	
Red	
Purple	
Brown	
	Key  = 2 smarties

How many green smarties are there? _____

How many brown smarties are there? _____

Which is the most popular smartie colour? _____

Which is the least popular smartie colour? _____

How many more yellow smarties are there than pink smarties? _____


How many more purple smarties are there than blue smarties? _____

How many more purple than blue smarties are there? _____

How many more red smarties are there than brown smarties? _____

How many smarties were there in the box altogether? _____

Favourite Sports



Answer these questions about the pictogram.

How many children like football? _____

How many children like hockey? _____

Which sport is the most popular? _____

Which sport is the least popular? _____

How many children were asked to say their favourite sport altogether? _____

How many people like gymnastics than hockey? _____

How many more children liked rugby than gymnastics? _____

How many fewer children liked swimming than football? _____