







Wednesday 27.1.21 LO: To describe properties of shape.

## 2D Shape Properties Table

Look carefully at the properties of these 2D shapes. Write your results in the table.

| 2D Shape                                                                            | Total Number of Sides | Number of Straight Sides | Number of Curved Sides | Number of Vertices | Name of Each Shape |
|-------------------------------------------------------------------------------------|-----------------------|--------------------------|------------------------|--------------------|--------------------|
|    |                       |                          |                        |                    |                    |
|    |                       |                          |                        |                    |                    |
|    |                       |                          |                        |                    |                    |
|   |                       |                          |                        |                    |                    |
|  |                       |                          |                        |                    |                    |
|  |                       |                          |                        |                    |                    |

Triangle  
Circle  
Pentagon  
Hexagon  
Square  
Rectangle

Draw an  
octagon below

How many sides  
does it have?

Extension

Choose 2 shapes. Write down their similarities and differences.