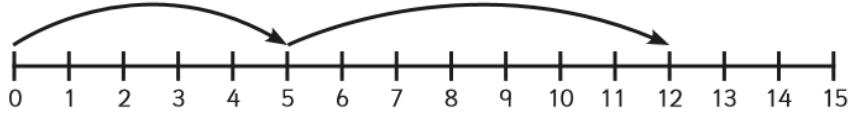


## Addition to 20 on a Number Line

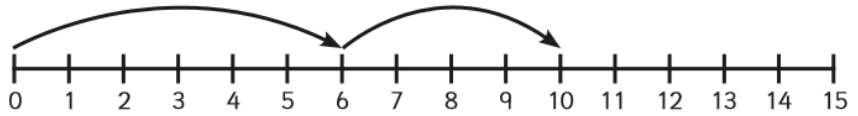
For these questions, can you work out which sums are being shown on the number lines?

The first one has been done for you.

1.  $5 + 7 = 12$



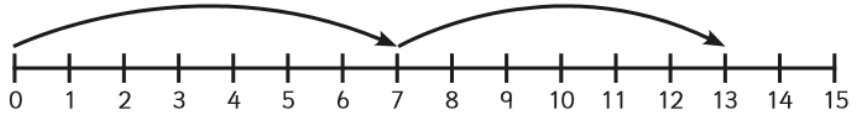
2.  $\square + \square = \square$



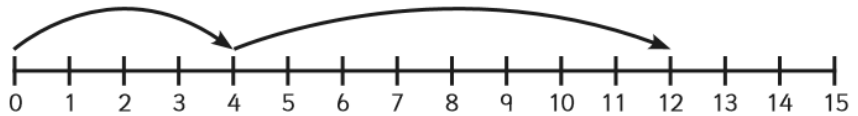
3.  $\square + \square = \square$



4.  $\square + \square = \square$



5.  $\square + \square = \square$



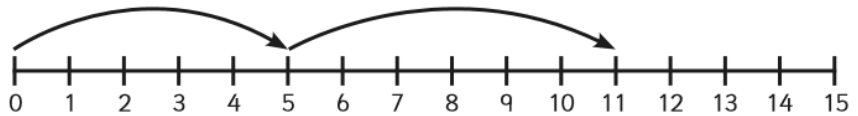
6.  $\square + \square = \square$



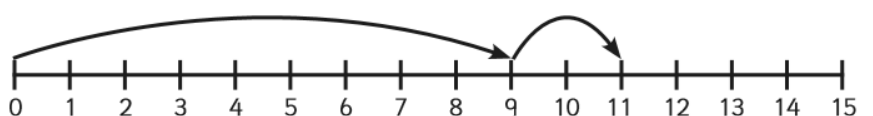
7.  $\square + \square = \square$



8.  $\square + \square = \square$



9.  $\square + \square = \square$



10.  $\square + \square = \square$

