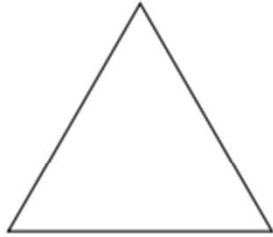


Thursday Lesson 4.2.21 LO: Find lines of symmetry and complete the symmetrical shape.



Name _____

Sides _____

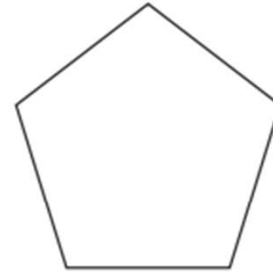
Lines of Symmetry _____



Name _____

Sides _____

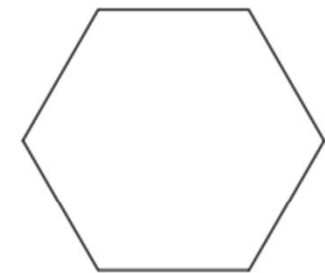
Lines of Symmetry _____



Name _____

Sides _____

Lines of Symmetry _____



Name _____

Sides _____

Lines of Symmetry _____

Draw the rest of the shape on the other side of the line.

